

USN

--	--	--	--	--	--	--	--	--	--

15EC34

Third Semester B.E. Degree Examination, Dec.2019/Jan.2020 Network Analysis

Time: 3 hrs.

Max. Marks: 80

Note: 1. Answer any FIVE full questions, choosing ONE full question from each module.
2. Missing data, if any, may be suitably assumed.

Module-1

- 1 a. Derive expression for converting star to delta. (08 Marks)
 b. Using Mesh current find V_2 which result a zero current in 4 ohm resistor in the network shown in Fig.Q1(b). (08 Marks)

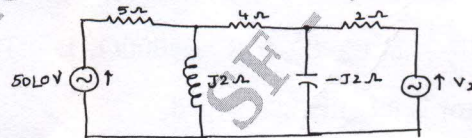


Fig.Q1(b)

OR

- 2 a. For the network of Fig.Q2(a), determine the v_1 and v_2 by nodal analysis. (08 Marks)

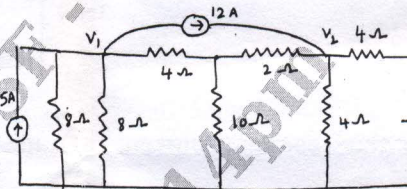


Fig.Q2(a)

- b. Find the current I in 28Ω resistor by Mesh analysis in Fig.Q2(b). (08 Marks)

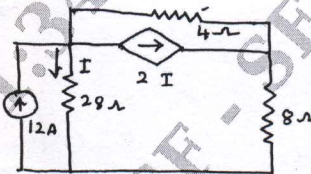


Fig.Q2(a)

Module-2

- 3 a. State and prove superposition theorem. (06 Marks)
 b. Using Milliman's theorem, find I_L through R_L for the network shown in Fig.Q3(b). (04 Marks)

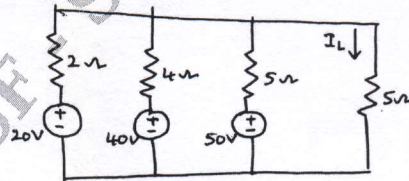


Fig.Q3(b)

- c. Obtain Norton equivalent of the network of Fig.Q3(c) between terminals A and B. (06 Marks)

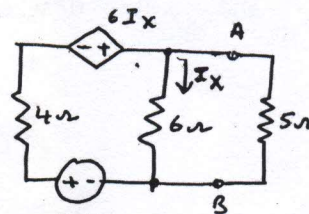


Fig.Q3(c)

Important Note : 1. On completing your answers, compulsorily draw diagonal cross lines on the remaining blank pages.
2. Any revealing of identification, appeal to evaluator and /or equations written eg, 42+8 = 50, will be treated as malpractice.

OR

- 4 a. State maximum power transfer theorem. Prove that $Z_L = Z_0^*$ for AC circuits. (08 Marks)
 b. Verify reciprocity theorem to find value of V_X in the circuit shown Fig.Q4(b). (08 Marks)

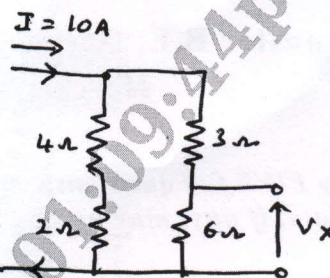


Fig.Q4(b)

Module-3

- 5 a. In the network shown in Fig.Q5(a), K is changed from position a to b at $t = 0$. Solve for i , $\frac{di}{dt}$ and $\frac{d^2i}{dt^2}$ at $t = 0^+$, if $R = 1000\Omega$, $L = 1H$, $C = 0.1\mu F$ and $V = 100V$. Assume that the capacitor is initially uncharged. (08 Marks)

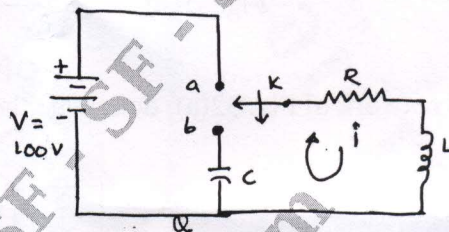


Fig.Q5(a)

- b. Determine the response current $i(t)$ in the circuit shown in Fig.Q5(b) using Laplace transform. (08 Marks)

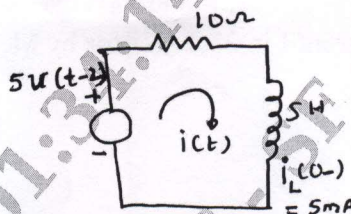


Fig.Q5(b)

OR

- 6 a. Synthesis the waveform shown in Fig.Q6(a) and find the Laplace transform of the periodic waveform. (08 Marks)

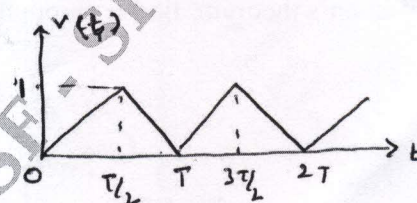


Fig.Q6(a)

- b. Determine v , $\frac{dv}{dt}$ and $\frac{d^2v}{dt^2}$ at $t = 0^+$ when the switch k is opened at $t=0$ in Fig.Q6(b). (08 Marks)

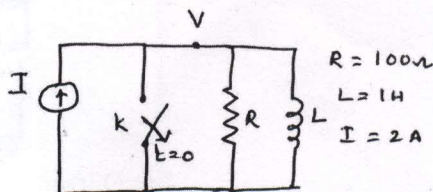
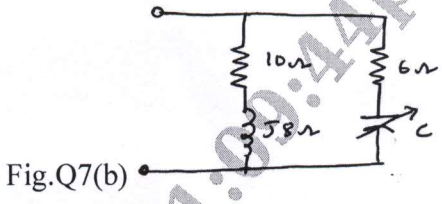


Fig.Q6(b)



Module-4

- 7 a. What is resonance? Show that $f_0 = \sqrt{f_1 f_2}$ for series resonance circuit. (08 Marks)
- b. Find the values of c for which the circuit given in Fig.Q7(b) resonates at 750Hz. (08 Marks)

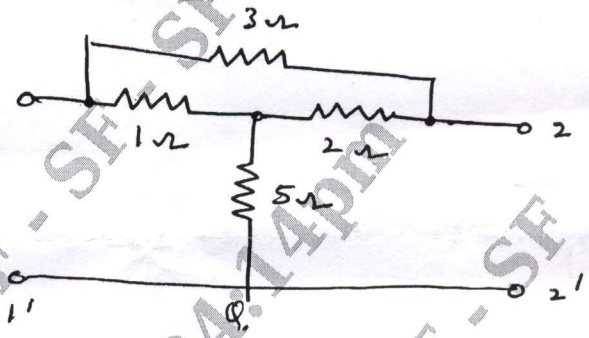


OR

- 8 a. A series RLC circuit has $R = 4\Omega$, $L = 1\text{mH}$, and $C = 10\mu\text{F}$, calculate Q - factor, bandwidth, resonant frequency and the half power frequencies f_1 and f_2 . (08 Marks)
- b. Derive expression for f_r , Q and bandwidth of a parallel resonant circuit with lossless capacitor in parallel with a coil of resistance R and inductance L. (08 Marks)

Module-5

- 9 a. Derive Y parameters and transmission parameters of a circuit interms of its z-parameters. (08 Marks)
- b. Find the z-parameters for the network shown in Fig.Q9(b). (08 Marks)



OR

- 10 a. The z parameters of a two port network are $z_{11} = 20\Omega$, $z_{22} = 30\Omega$, $z_{12} = z_{21} = 10\Omega$. Find Y and ABCD parameters. (08 Marks)
- b. Determine Y parameters of the two port network shown in Fig.Q10(b). (08 Marks)

