



USN

--	--	--	--	--	--	--	--	--	--	--	--	--	--	--	--	--	--	--	--

10ES33

**Third Semester B.E. Degree Examination, Dec.2016/Jan.2017**  
**Logic Design**

Time: 3 hrs.

Max. Marks:100

**Note: Answer any FIVE full questions, selecting  
atleast TWO questions from each part.**

**PART – A**

- 1 a. A logic circuit has 4 inputs P, Q, R, S and 2 outputs  $Y_1, Y_2$ .
  - i)  $Y_1$  is '1' when majority of inputs are '1' (equal numbers of '0' and '1' are treated don't care)
  - ii)  $Y_2$  is '1' when two adjacent inputs are '1' (P and S are treated adjacent)Design the circuit using NAND gates only. (12 Marks)
- b. Determine minimal POS and SOP for  $f(E, F, G, H) = \pi(0, 1, 2, 7, 11, 13) \cdot d(4, 5, 8, 10, 14)$ . (08 Marks)
- 2 a. Using Quine – McCluskey technique simplify the Boolean expression.  
 $f(A, B, C, D) = \Sigma(0, 5, 7, 8, 9, 10, 11, 14, 15)$ . (10 Marks)
- b. Simplify and realize the given function using MEV technique taking least significant variable as map entered variable.  
 $f(a, b, c, d, e) = \Sigma(1, 3, 4, 6, 9, 11, 12, 14, 17, 19, 20, 22, 25, 27, 28, 30)$ . (10 Marks)
- 3 a. With the help of logic diagram, truth table and circuit diagram, explain 3-to-8 line decoder with active low outputs. Using the same implement the functions :  
 $f_1 = \pi(0, 3, 5, 6)$   
 $f_2 = \pi(2, 3, 4, 5, 7)$ . (10 Marks)
- b. What are the limitations of basic encoder? Design a 4-2 priority encoder with validity output. (10 Marks)
- 4 a. Explain how look Ahead carry adder speeds up operation of addition over basic parallel adder. (10 Marks)
- b. Implement  $f(A, B, C, D) = \Sigma m(0, 1, 3, 4, 8, 9, 15)$  using i) 74151 (8-1 MUX) ii) 74153 (dual 4-1 mux). (06 Marks)
- c. Define Dmux, design 1-4 Dmux. (04 Marks)

**PART – B**

- 5 a. Explain the application of SR Latch as switch de-bouncer. (06 Marks)
- b. Explain the operation of asynchronous inputs of flip-flop with waveforms. (06 Marks)
- c. Write the logic circuit and truth table of D and T FFS. Draw the output waveforms for the input shown for :
  - i) D latch
  - ii) Gated D latch
  - iii) +ve edge TFF
  - iv) -ve edge TFF. (08 Marks)




Fig. Q5(c)

Important Note : 1. On completing your answers, compulsorily draw diagonal cross lines on the remaining blank pages.  
2. Any revealing of identification, appeal to evaluator and /or equations written eg. 42+8 = 50, will be treated as malpractice.



10ES33

- 6 a. Design a mod16 asynchronous down counter using D flip-flops. (10 Marks)  
 b. Explain the operation of : i) parallel in serial out shift register ii) twisted ring counter. (10 Marks)
- 7 a. Differentiate between Moore and Mealy models. (05 Marks)  
 b. Construct the transition table, state table and state diagram for the Moore sequential circuit shown. (15 Marks)

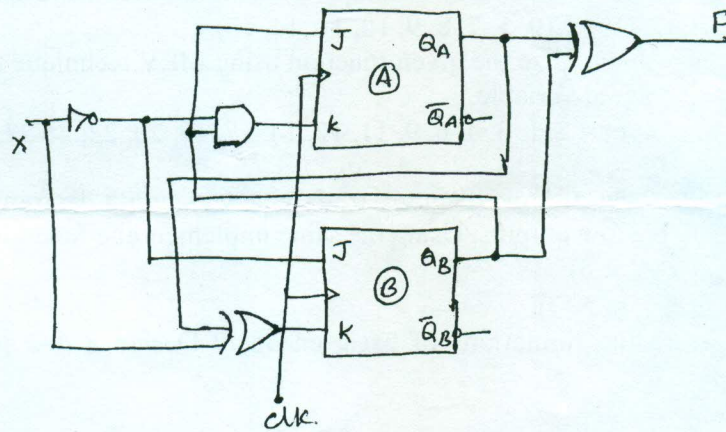


Fig. Q7(b)

- 8 a. Explain lockout condition. How do you eliminate it? Design a synchronous counter for :  
 $4 \rightarrow 6 \rightarrow 7 \rightarrow 3 \rightarrow 1 \rightarrow 4$ .  
 Avoid lockout condition. Use JK flip-flop. (12 Marks)
- b. A sequential circuit has one input and one output. The state diagram is as shown in Fig. Q8(b). Design the circuit using D FF. (08 Marks)

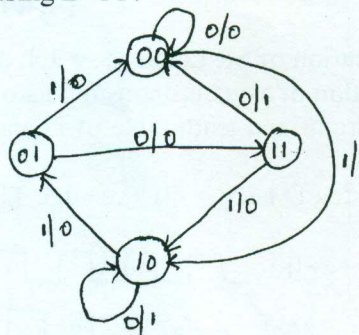


Fig. Q8(b)

\*\*\*\*\*