

USN

--	--	--	--	--	--	--	--	--	--

10CV767

**Seventh Semester B.E. Degree Examination, Dec.2017/Jan.2018**  
**Structural Dynamics**

Time: 3 hrs.

Max. Marks:100

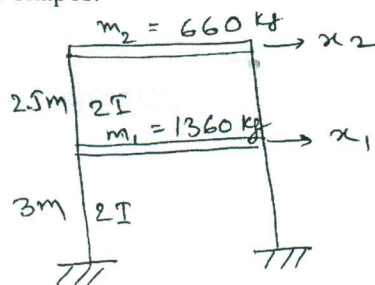
**Note: Answer FIVE full questions, selecting at least TWO questions from each part.**

**PART – A**

- 1 a. Explain critical damping, over damping and under damping pertaining to single degree of freedom system. (05 Marks)
- b. Differentiate between: (i) Forced vibrations and free vibrations. (05 Marks)  
(ii) Random excitation and harmonic excitation.
- c. A machine of 80 kg mass is mounted on a spring whose total stiffness is 50 kN/m and total damping is 10 kN/m. Find the motion  $U(t)$  for initial displacement of 20 mm and initial velocity of 100 mm/sec. (10 Marks)
- 2 a. Explain the logarithmic damping and derive the expression for the same. (05 Marks)
- b. A SDOF system consists of mass 20 kg, stiffness of the spring 2200 N/m and a dashpot with a damping coefficient of 60 N-S/m is subjected to a harmonic excitation of  $F = 200 \sin 5t$ . Write the complete solution of the equation of motion. (15 Marks)
- 3 a. Explain the dependence of transmissibility on frequency ratio and damping ratio with a qualitative graph relating to all the above mentioned three quantities. What is the range of frequency ratio for which isolation is effective? (08 Marks)
- b. An engine weighing 1000 N including reciprocating parts is mounted on springs. The weights of the reciprocating parts is 22 N and the stroke is 90 mm. The engine speed is 720 rpm. Neglecting damping find the stiffness of the springs, so that the force transmitted to the foundation is 5% of the amplitude force. If under the actual working conditions the damping reduces the amplitude of successive vibration by 25% determine the force transmitted at 720 rpm. (12 Marks)
- 4 a. Derive an expression for Duhamul's integral in respect of response of single degree of freedom system to general dynamic loading. (10 Marks)
- b. State and prove principle of orthogonality of modes. (10 Marks)

**PART – B**

- 5 Determine the natural frequencies and mode shapes for the structure as shown in Fig. Q5. Draw the mode shapes. (20 Marks)



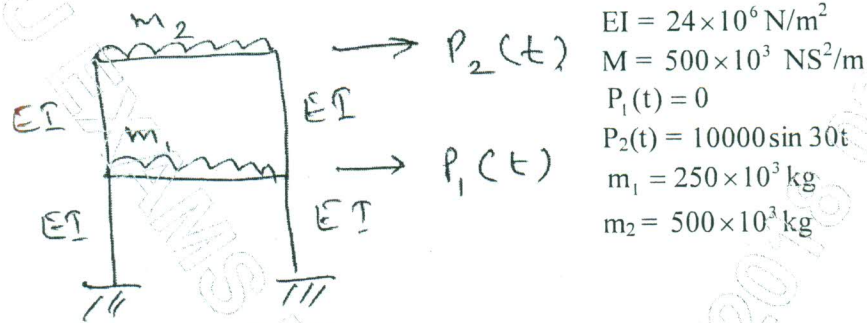
$$I = 5 \times 10^5 \text{ mm}^4$$

$$E = 2.5 \times 10^4 \text{ N/mm}^2$$

Fig. Q5

Important Note : 1. On completing your answers, compulsorily draw diagonal cross lines on the remaining blank pages.  
 2. Any revealing of identification, appeal to evaluator and/or equations written eg. 42+8 = 50, will be treated as malpractice.

- 6 Compute the response due to harmonic loading for the shear frame shown in Fig. Q6. (20 Marks)



$$\begin{aligned}
 EI &= 24 \times 10^6 \text{ N/m}^2 \\
 M &= 500 \times 10^3 \text{ NS}^2/\text{m} \\
 P_1(t) &= 0 \\
 P_2(t) &= 10000 \sin 30t \\
 m_1 &= 250 \times 10^3 \text{ kg} \\
 m_2 &= 500 \times 10^3 \text{ kg}
 \end{aligned}$$

Fig. Q6

- 7 For a three storied shear building subjected to harmonic loading. Compute the response, given the results of the free vibration analysis. Neglect axial deformation in all structural elements.

Given : Stiffness of floors

$$K_1 = K_2 = 160 \times 10^6 \text{ N/m}$$

$$K_3 = 240 \times 10^6 \text{ N/m}$$

$$M_1 = M_2 = M_3 = 20 \times 10^3 \text{ kg}$$

Natural frequencies are  $\omega_1 = 43.87 \text{ rad/s}$ ,  $\omega_2 = 120.15 \text{ rad/s}$ ,  $\omega_3 = 167 \text{ rad/s}$ .

Mode shapes :

$$[\phi_1] = \begin{bmatrix} 1.00 \\ 0.76 \\ 0.34 \end{bmatrix}, \quad [\phi_2] = \begin{bmatrix} 1.00 \\ -0.80 \\ -1.16 \end{bmatrix}, \quad [\phi_3] = \begin{bmatrix} 1.00 \\ -2.43 \\ 2.51 \end{bmatrix}$$

(20 Marks)

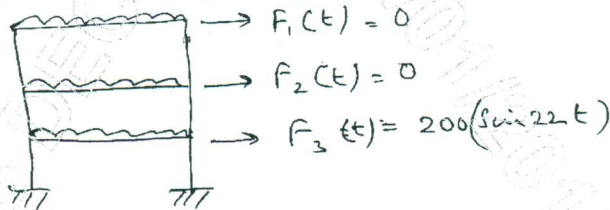


Fig. Q7

- 8 a. Derive the governing differential equation of motion for a free flexural vibration of beam. (10 Marks)
- b. Explain the lumped mass and consistent mass formulation for vibration of beam. (10 Marks)

\*\*\*\*\*